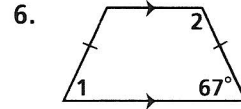
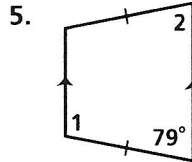
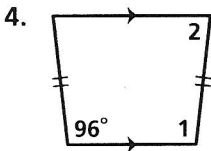
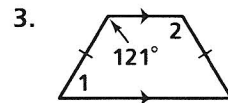
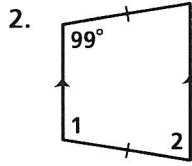
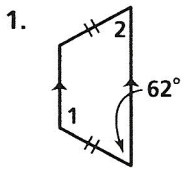


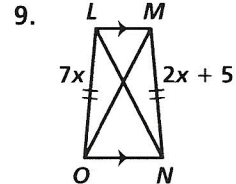
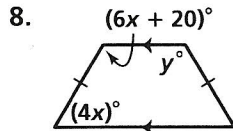
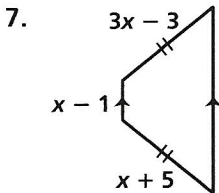
Practice 6-5

Trapezoids and Kites

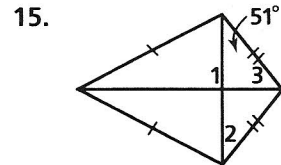
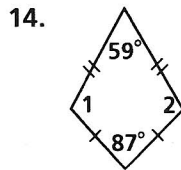
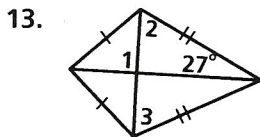
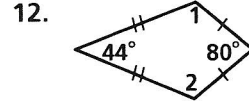
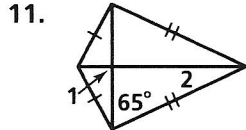
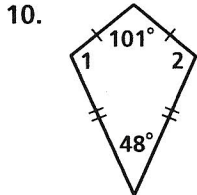
Find the measures of the numbered angles in each isosceles trapezoid.



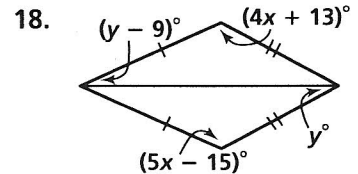
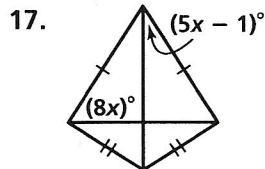
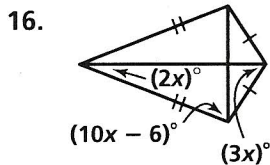
Algebra Find the value(s) of the variable(s) in each isosceles trapezoid.



Find the measures of the numbered angles in each kite.



Algebra Find the value(s) of the variable(s) in each kite.



All rights reserved.

© Pearson Education, Inc., publishing as Pearson Prentice Hall.